

Maths Dash Program
Level B – Piling - 7
 (Addition by groups of 2 from 0 to 10)



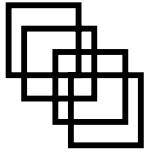
Name: _____

Date: _____

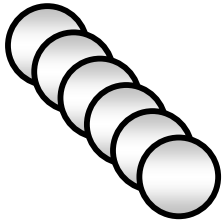
SCORE: ____ /15

Try These Other Activities. Adjust to particular MD level.

- Identify the shapes.
- Largest group? Smallest group?
- Cancel groups out. How many of a particular shape left?
- How many groups of an equal number?
- How many odd groups, odd numbers? How many even groups, even numbers?




$6 + 2 =$




$8 + 2 =$

$8 + 2 =$

$2 + 2 =$

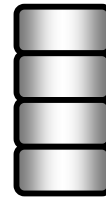


$4 + 2 =$



$4 + 2 =$

$2 + 2 =$

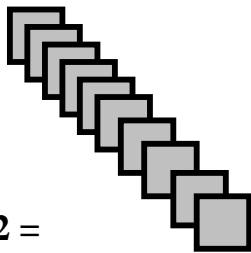


$6 + 2 =$

$2 + 2 =$



$8 + 2 =$



$8 + 2 =$

$2 + 0 =$



$4 + 2 =$



$4 + 2 =$

$2 + 2 =$

Match the group with the answer.

How About These Activities? Adjust to particular MD level.

- Call out number. Cover with counter. 1st to cover a number.
- Use ruler to join up. Longest? Shortest? Estimate / measure length.
- How many to add to each group to make up another number?
- How many to take away to make 1 left over? 2 left over?
- Create live problem situations to include these numbers.
- Students to form groups. How many when doubled?

